



Home Learning Timetable
Year Group: 1
Date: 7.12.20



Please find below the tasks that I would like you to complete this week. You can photograph your work and send it to me or email me to let me know how you have got on. Please email me if you have any questions and I will get back to you as soon as I can.

	Subject	Task
Monday	Maths	Recap from last week – Numbers to 20 and tens and ones Choose one or two of the videos to watch and complete https://whiterosemaths.com/homelearning/year-1/week-11-number-place-value-within-20/
	Phonics	Watch this Read Write Inc phonics lesson on the sound 'e' https://www.youtube.com/watch?v=aksA_jcOtoU
	English	Match the words together to form compound words. Compound words are two separate words that can be merged to create a compound word. post pence letter man six bread work shop ginger box Challenge: Can you use the compound words in a sentence?
	PE	Watch the PE with Jo video below and join in https://www.youtube.com/watch?v=sX05HHni9Wk OR Watch and join in with a Cosmic Yoga video https://www.youtube.com/watch?v=iQa9qsYDH_Y

	Subject	Task
Tuesday	Maths	Counting 1 more and 1 less – See resources for activities
	Phonics	Watch this Read Write Inc phonics lesson on the sound 'wh' https://www.youtube.com/watch?v=lgmzaWve2Xk
	English	Add ing to the words below and then use them in sentences. play sleigh sway hang snow blow (See resources for answers)
	Art	Watch the video below and try to recreate the snowman folding surprise art. How To Draw A Snowman (Folding Surprise) - YouTube

	Subject	Task
Wednesday	Maths	Comparing numbers of objects – See resources for activities
	Phonics	Watch this Read Write Inc phonics lesson on the sound 'ie' https://www.youtube.com/watch?v=6zVm_zO-0hY
	English	Watch the story of 'The Jolly Christmas Postman' by clicking on the link below. Mrs C Readalouds The Jolly Christmas Postman Janet Ahlberg - YouTube Pick a character from the story 'The Jolly Christmas Postman' and write an address for them. An address should include their name, number and street name, town or city and postcode. All of these words are nouns and should have a capital letter.

		E.g. The Gingerbread Man 26 Bakery Lane Baking BA1 3GB
	PSHE (Jigsaw)	Our final Jigsaw lesson is on celebrating you and your differences. Write down one way you are kind to people in your class. Complete this sentence: I am special and unique because...

	Subject	Task
Thursday	Maths	Comparing numbers – See resources for activities
	Phonics	Watch this Read Write Inc phonics lesson on the sound 'kn' https://www.youtube.com/watch?v=PKRa0DxSzc
	English	Imagine you are the Jolly Christmas Postman. What would your day be like? What would you get up to? Write a diary entry of your day as a Christmas Postman. Challenge: Can you use time adverbials? First, Second, Next, After that, Then, Finally See resources for an example.
	Geography	Why are there so many leaves on the floor? Click the link below and learn about why leaves fall off trees. Why do leaves fall off trees? - BBC Bitesize


	Subject	Task
Friday	Maths	Ordering objects and numbers – See resources for activities
	Phonics	Watch this Read Write Inc phonics lesson on the sound 'ph' https://www.youtube.com/watch?v=tclsqNdt54l
	English	Watch the story 'The Jolly Christmas Postman' and sequence the story using pictures. Mrs C Readalouds The Jolly Christmas Postman Janet Ahlberg - YouTube See resources
	DT (Food)	Can you design a treat for Santa Claus? Draw your treat and label the food you have used. Challenge: Can you search the internet (with an adult) and find out which country the food items you have used come from?

Resources

Tuesday


Maths

Counting one more, one less

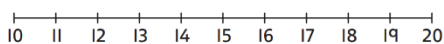
1 There are 12 .



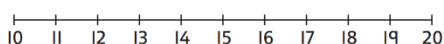
One more  arrives.

How many  are there now?

2 a) Show 1 less than 19.



b) Show 1 more than 15.



3 Write 1 more than each number.

a) 13

b) 11

c) 19

d) fifteen


4 Write 1 less than each number.

a) 12

b) 16

c) 20

d) fifteen

5 Mark has 10 .

His mum gives him one more.

How many  does Mark have now?

6 Write **more** or **less** to complete each sentence.

a) 14 is 1 _____ than 15.

b) 18 is 1 _____ than 17.

c) $10 + 2$ is 1 _____ than 11.

7 I more than is 1 less than .



I wonder how many answers there are.

CHALLENGE

Reflect

Write a number in the middle box.

Fill in the other boxes to show one less and one more.

●	one less	number	one more
●	<input type="text"/>	<input type="text"/>	<input type="text"/>
●			
●			

English (answers)

playing sleighing swaying hanging snowing blowing

Wednesday

Maths

Comparing numbers of objects

1 Lena 

Kai 

a) Who has fewer buttons? _____

b) Complete the number sentence.

12 ○ 9


2 Lena 

Kai 

a) Who has fewer buttons? _____

b) Complete the number sentence.

6 ○ 11

3 Tess 

Dan 

a) Who has more blocks? _____

b) Fill in the number sentence.

□ ○ □

4 Tess 

Dan 

a) Who has more blocks? _____

b) Fill in the number sentence.

□ ○ □

5 Emma has 15 

Draw some  for Joe so he has more than Emma.

Emma

Joe



Reflect

Explain how you can compare numbers of objects.

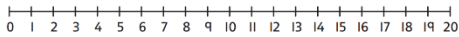
• _____
• _____
• _____

Thursday

Maths

Comparing numbers

1 Complete the number sentences. Write **greater than** or **less than**.



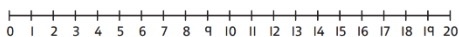
a) 15 is _____ 13.

b) 17 is _____ 19.

c) $10 + 5$ is _____ $10 + 4$.

d) 6 is _____ 16.

2 Complete the number sentences using $<$ or $>$.



a) 15 ○ 13

d) 3 ○ 13

b) 17 ○ 19

e) 19 ○ 5

c) $10 + 5$ ○ $10 + 4$

3 Circle all the numbers greater than 12.

15 7 11 12 18

4 Circle all the numbers less than 15.

10 6 20 11 2

5 Tick the greater number in each pair.

a) 15 18 b) 9 19 c) 20 18

6 $12 <$ □

I will find as many answers as I can.




7 Complete the number sentences. Use each number once.

15 20 12

$13 <$ □

□ $>$ 9

$15 =$ □

8 Ben has 12 

Mo has 1 more  than Ben.

Use $<$ or $>$ to show this in a number sentence.

□ ○ □

Reflect

Complete the number sentences.

Use 4 different numbers.

• □ $<$ □ □ $>$ □
• _____
• _____

English (example)

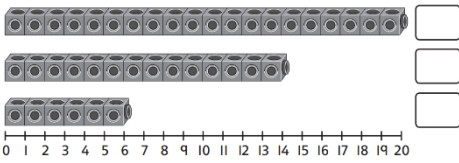
Dear Diary,

Today, I am delivering all the letters and cards to the right people. First, I got on my bike and rode along the windy road to the Gingerbread man's house. He lived in a small tin. Next, I went to the big bad wolf's house, but I was a little scared. After that, I went to Little Red Riding Hood's house and delivered her post. Finally, I went to the three bears cottage in the forest and smelt delicious porridge. I gave them their post and they even offered me some porridge. It was delicious!

Ordering objects and numbers

1 Here are 3 numbers.

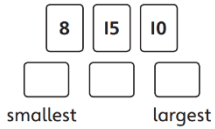
a) What numbers are shown?



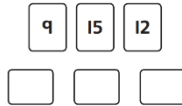
b) Which is the largest number?

c) Which is the smallest number?

2 Put the numbers in order from smallest to largest.



3 Order the numbers from largest to smallest.



4 Compare 4, 14 and 9.

a) The smallest number is .

b) The largest number is .

c) Order the numbers from largest to smallest.



5 Tim has 12 stickers.

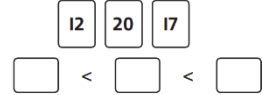
Jo has 20 stickers.

Kat has 7 stickers.

a) Who has the most stickers? _____

b) Who has the fewest stickers? _____

6 Fill in the number sentence. Use each number once.



7 Sam has more than Bilal.

Bilal has more than Jan.

Jan has 14 .

How many could Sam and Bilal have?

CHALLENGE

Reflect

9, 18, 16

Order these numbers in two ways.

• _____

• _____

• _____

English

